

第一部份：經濟學（五十分）

1. 什麼是在職訓練？在職訓練有二種，一種是一般性訓練，一種是專門性訓練。請舉例說明這二種訓練的差別，請說明職業證照是一般性或專門性訓練，為什麼？請說明雇主在支付此二種訓練時應該有那些差別。（15%）
2. 什麼是獨佔？寡佔？壟斷性競爭？請說明台灣的汽車業，煉油業，便利商店、加油站各屬那一類？學生們常去參加的英文補習班，托福補習班，升學補習班又屬於那一類型的競爭？為什麼？（15%）
3. 什麼是成本不變的產業？什麼是成本遞減的產業？請先繪圖說明此二種產業的差別，再各舉二個台灣的產業實例說明此二種產業的分別。（10%）
4. 在經濟學上有所謂「囚犯困境」(the prisoner dilemma)，什麼是「囚犯困境」，它與企業的經營策略有何關係？（10%）

注意：背面有試題

第二部分：統計學（五十分）

入學統計考題（共十題，總計五十分）

（注意事項：考題不需使用計算機，答題所需相關的統計表格請參見附錄）

1. Find the following areas under the standard normal curve. (每小題五分，共十分)
 - (a) Area to the right of $z = 2.32$
 - (b) Area to the left of $z = -1.54$

2. The mean rent paid by all tenants in a large city is \$950 with a standard deviation of \$225. However, the population distribution of rents for all tenants in this city is skewed to the right. (每小題五分，共十分)
 - (a) Calculate the mean and standard deviation of \bar{x}
 - (b) Describe the shape of its sampling distribution when the sample size is 100.

3. A publishing company has just published a new college textbook. Before the company decides the price at which to sell this textbook, it wants to know the average price of all such textbooks in the market. The research department at the company took a sample of 36 such textbooks and collected information on their prices. This information produced a mean price of \$48.40 for this sample. It is known that the standard deviation of the prices of all such textbooks is \$4.50. (每小題五分，共十分)
 - (a) What is the price estimate of the mean price of all such college textbooks?
What is the margin of error for this estimate?
 - (b) Construct a 90% confidence interval for the mean price of all such college textbooks.

4. A sample of 14 cans of Brand 1 diet soda gave the mean number of calories of 23 per can with a standard deviation of 3 calories. Another sample of 16 cans of Brand 2 diet soda gave the mean number of calories of 25 per can with a standard deviation of 4 calories. Assume that the calories per can of diet soda are normally distributed for each of the two brands and that the standard deviations for the two populations are equal. At the 1% significance level, are the mean number of calories per can different for these two brands of diet soda? (此題五分)

5. Windham Electronics Company manufactures cassettes. The company has two machines that are used to manufacture cassette. From time to time the quality control inspector at the company takes a sample of cassettes and checks them for being good or defective. A recent such sample of 200 cassettes produced the two-way classification presented in the following table.

	Good (G)	Defective (D)
Machine I (A)	109	11
Machine II (B)	66	14

Does the sample provide sufficient evidence to conclude that the two attributes, the machine type and cassettes being good or defective, are dependent? Use $\alpha = .01$.
(此題五分)

6. Simsbury Inc. opened three supermarkets in Connecticut four years ago. Among other things, the quality control department at the company has always given a high priority to customer satisfaction. From time to time this department survey the shoppers at the three stores to find out how satisfied they are. A recent such survey produced the following data on customer satisfaction, which is measured on a scale of 1 to 10, 1 being the lowest level of satisfaction and 10 being the highest.

Store I	Store II	Store III
8	7	9
6	9	7
9	7	8
7	5	8
8	8	9

Using the 1% significance level, test the null hypothesis that the mean consumer satisfaction index is the same for each of these three stores. (此題五分)

7. Which of the following assumption(s) must hold true to use one-way ANOVA?

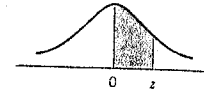
- (1) The populations from which the samples are drawn are normally distributed.
 - (2) The populations from which the samples are drawn have the same variance.
 - (3) The samples drawn from different populations are random and independent.
- (此題五分)

- (a) (1) and (2)
- (b) (2) and (3)
- (c) (1) and (3)
- (d) all above

附錄

STANDARD NORMAL DISTRIBUTION TABLE


The entries in the table give the areas under the standard normal curve from 0 to z.



z	.00	.01	.02	.03	.04	.05	.06	.07	.08	.09
0.0	.0000	.0040	.0080	.0120	.0160	.0199	.0239	.0279	.0319	.0359
0.1	.0398	.0438	.0478	.0517	.0557	.0596	.0636	.0675	.0714	.0753
0.2	.0793	.0832	.0871	.0910	.0948	.0987	.1026	.1064	.1103	.1141
0.3	.1179	.1217	.1255	.1293	.1331	.1368	.1406	.1443	.1480	.1517
0.4	.1554	.1591	.1628	.1664	.1700	.1736	.1772	.1808	.1844	.1879
0.5	.1915	.1950	.1985	.2019	.2054	.2088	.2123	.2157	.2190	.2224
0.6	.2257	.2291	.2324	.2357	.2389	.2422	.2454	.2486	.2517	.2549
0.7	.2580	.2611	.2642	.2673	.2704	.2734	.2764	.2794	.2823	.2852
0.8	.2881	.2910	.2939	.2967	.2995	.3023	.3051	.3078	.3106	.3133
0.9	.3159	.3186	.3212	.3238	.3264	.3289	.3315	.3340	.3365	.3389
1.0	.3413	.3438	.3461	.3485	.3508	.3531	.3554	.3577	.3599	.3621
1.1	.3643	.3665	.3686	.3708	.3729	.3749	.3770	.3790	.3810	.3830
1.2	.3849	.3869	.3888	.3907	.3925	.3944	.3962	.3980	.3997	.4015
1.3	.4032	.4049	.4066	.4082	.4099	.4115	.4131	.4147	.4162	.4177
1.4	.4192	.4207	.4222	.4236	.4251	.4265	.4279	.4292	.4306	.4319
1.5	.4332	.4345	.4357	.4370	.4382	.4394	.4406	.4418	.4429	.4441
1.6	.4452	.4463	.4474	.4484	.4495	.4505	.4515	.4525	.4535	.4545
1.7	.4554	.4564	.4573	.4582	.4591	.4599	.4608	.4616	.4625	.4633
1.8	.4641	.4649	.4656	.4664	.4671	.4678	.4686	.4693	.4699	.4706
1.9	.4713	.4719	.4726	.4732	.4738	.4744	.4750	.4756	.4761	.4767
2.0	.4772	.4778	.4783	.4788	.4793	.4798	.4803	.4808	.4812	.4817
2.1	.4821	.4826	.4830	.4834	.4838	.4842	.4846	.4850	.4854	.4857
2.2	.4861	.4864	.4868	.4871	.4875	.4878	.4881	.4884	.4887	.4890
2.3	.4893	.4896	.4898	.4901	.4904	.4906	.4909	.4911	.4913	.4916
2.4	.4918	.4920	.4922	.4925	.4927	.4929	.4931	.4932	.4934	.4936
2.5	.4938	.4940	.4941	.4943	.4945	.4946	.4948	.4949	.4951	.4952
2.6	.4953	.4955	.4956	.4957	.4959	.4960	.4961	.4962	.4963	.4964
2.7	.4965	.4966	.4967	.4968	.4969	.4970	.4971	.4972	.4973	.4974
2.8	.4974	.4975	.4976	.4977	.4978	.4979	.4980	.4981	.4982	.4983
2.9	.4984	.4985	.4986	.4987	.4988	.4989	.4990	.4991	.4992	.4993
3.0	.4994	.4995	.4996	.4997	.4998	.4999	.5000	.5000	.5000	.5000

THE F DISTRIBUTION TABLE

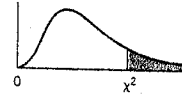
Area in the Right Tail under the F Distribution Curve = .01



	Degrees of Freedom for the Numerator																		
	1	2	3	4	5	6	7	8	9	10	11	12	15	20	25	30	40	50	100
1	4052	5000	5403	5625	5764	5859	5928	5981	6022	6056	6083	6106	6157	6209	6240	6261	6287	6303	6334
2	98.50	99.00	99.17	99.25	99.30	99.33	99.36	99.37	99.39	99.40	99.41	99.42	99.43	99.45	99.46	99.47	99.47	99.48	99.49
3	34.12	30.82	29.46	28.71	28.24	27.91	27.67	27.49	27.35	27.23	27.13	27.05	26.87	26.69	26.58	26.50	26.41	26.35	26.24
4	21.20	18.00	16.69	15.98	15.52	15.21	14.98	14.80	14.66	14.55	14.45	14.37	14.20	14.02	13.91	13.84	13.75	13.69	13.58
5	16.26	13.27	12.06	11.39	10.97	10.67	10.46	10.29	10.16	10.05	9.96	9.89	9.72	9.55	9.45	9.38	9.29	9.24	9.13
6	13.75	10.92	9.78	9.15	8.75	8.47	8.26	8.10	7.98	7.87	7.79	7.72	7.56	7.40	7.30	7.23	7.14	7.09	6.99
7	12.25	9.55	8.45	7.85	7.46	7.19	6.99	6.84	6.72	6.62	6.54	6.47	6.31	6.16	6.06	5.99	5.91	5.86	5.75
8	11.26	8.65	7.59	7.01	6.63	6.37	6.18	6.03	5.91	5.81	5.73	5.67	5.52	5.36	5.26	5.20	5.12	5.07	4.96
9	10.56	8.02	6.99	6.42	6.06	5.80	5.61	5.47	5.35	5.26	5.18	5.11	4.96	4.81	4.71	4.65	4.57	4.52	4.41
10	10.04	7.56	6.55	5.99	5.64	5.39	5.20	5.06	4.94	4.85	4.77	4.71	4.56	4.41	4.31	4.25	4.17	4.12	4.01
11	9.65	7.21	6.22	5.67	5.32	5.07	4.89	4.74	4.63	4.54	4.46	4.40	4.25	4.10	4.01	3.94	3.86	3.81	3.71
12	9.33	6.93	5.95	5.41	5.06	4.82	4.64	4.50	4.39	4.30	4.22	4.16	4.01	3.86	3.76	3.70	3.62	3.57	3.47
13	9.07	6.70	5.74	5.21	4.86	4.62	4.44	4.30	4.19	4.10	4.02	3.96	3.82	3.66	3.57	3.51	3.43	3.38	3.27
14	8.86	6.51	5.56	5.04	4.69	4.46	4.28	4.14	4.03	3.94	3.86	3.80	3.66	3.51	3.41	3.35	3.27	3.22	3.11
15	8.68	6.36	5.42	4.89	4.56	4.32	4.14	4.00	3.89	3.80	3.73	3.67	3.52	3.37	3.28	3.21	3.13	3.08	2.98
16	8.53	6.23	5.29	4.77	4.44	4.20	4.03	3.89	3.78	3.69	3.62	3.55	3.41	3.26	3.16	3.10	3.02	2.97	2.86
17	8.40	6.11	5.18	4.67	4.34	4.10	3.93	3.79	3.68	3.59	3.52	3.46	3.31	3.16	3.07	3.00	2.92	2.87	2.76
18	8.29	6.01	5.09	4.58	4.25	4.01	3.84	3.71	3.60	3.51	3.43	3.37	3.23	3.08	2.98	2.92	2.84	2.78	2.68
19	8.18	5.93	5.01	4.50	4.17	3.94	3.77	3.63	3.52	3.43	3.36	3.30	3.15	3.00	2.91	2.84	2.76	2.71	2.60
20	8.10	5.85	4.94	4.43	4.10	3.87	3.70	3.56	3.46	3.37	3.29	3.23	3.09	2.94	2.84	2.78	2.69	2.64	2.54
21	8.02	5.78	4.87	4.37	4.04	3.81	3.64	3.51	3.40	3.31	3.24	3.17	3.03	2.88	2.79	2.72	2.64	2.58	2.48
22	7.95	5.72	4.82	4.31	3.99	3.76	3.59	3.45	3.35	3.26	3.18	3.12	2.98	2.83	2.73	2.67	2.58	2.53	2.42
23	7.88	5.66	4.76	4.26	3.94	3.71	3.54	3.41	3.30	3.21	3.14	3.07	2.93	2.78	2.69	2.62	2.54	2.48	2.37
24	7.82	5.61	4.72	4.22	3.90	3.67	3.50	3.36	3.26	3.17	3.09	3.03	2.89	2.74	2.64	2.58	2.49	2.44	2.33
25	7.77	5.57	4.68	4.18	3.85	3.63	3.46	3.32	3.22	3.13	3.06	2.99	2.85	2.70	2.60	2.54	2.45	2.40	2.29
30	7.56	5.39	4.51	4.02	3.70	3.47	3.30	3.17	3.07	2.98	2.91	2.84	2.70	2.55	2.45	2.39	2.30	2.25	2.13
40	7.31	5.18	4.31	3.83	3.51	3.29	3.12	2.99	2.89	2.80	2.73	2.66	2.52	2.37	2.27	2.20	2.11	2.06	1.94
50	7.17	5.06	4.20	3.72	3.41	3.19	3.02	2.89	2.78	2.70	2.63	2.56	2.42	2.27	2.17	2.10	2.01	1.95	1.82
100	6.90	4.82	3.98	3.51	3.21	2.99	2.82	2.69	2.59	2.50	2.43	2.37	2.22	2.07	1.97	1.89	1.80	1.74	1.60

CHI-SQUARE DISTRIBUTION TABLE

The entries in the table give the critical values of χ^2 for the specified number of degrees of freedom and areas in the right tail.

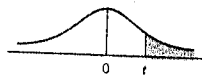


df	Area in the Right Tail under the Chi-square Distribution Curve									
	.995	.990	.975	.950	.900	.100	.050	.025	.010	.005
1	0.000	0.000	0.001	0.004	0.016	2.706	3.841	5.024	6.635	7.879
2	0.010	0.020	0.051	0.103	0.211	4.605	5.991	7.378	9.210	10.597
3	0.072	0.115	0.216	0.352	0.584	6.251	7.815	9.348	11.345	12.838
4	0.207	0.297	0.484	0.711	1.064	7.779	9.488	11.143	13.277	14.860
5	0.412	0.554	0.831	1.145	1.610	9.236	11.070	12.833	15.086	16.750
6	0.676	0.872	1.237	1.635	2.204	10.645	12.592	14.449	16.812	18.548
7	0.989	1.239	1.690	2.167	2.833	12.017	14.067	16.013	18.475	20.278
8	1.344	1.646	2.180	2.733	3.490	13.362	15.507	17.535	20.090	21.955
9	1.735	2.088	2.700	3.325	4.168	14.684	16.919	19.023	21.666	23.589
10	2.156	2.558	3.247	3.940	4.865	15.987	18.307	20.483	23.209	25.188
11	2.603	3.053	3.816	4.575	5.578	17.275	19.675	21.920	24.725	26.757
12	3.074	3.571	4.404	5.226	6.304	18.549	21.026	23.337	26.217	28.300
13	3.565	4.107	5.009	5.892	7.042	19.812	22.362	24.736	27.688	29.819
14	4.075	4.660	5.629	6.571	7.790	21.064	23.685	26.119	29.141	31.319
15	4.601	5.229	6.262	7.261	8.547	22.307	24.996	27.488	30.578	32.801
16	5.142	5.812	6.908	7.962	9.312	23.542	26.296	28.845	32.000	34.267
17	5.697	6.408	7.564	8.672	10.085	24.769	27.587	30.191	33.409	35.718
18	6.265	7.015	8.231	9.390	10.865	25.989	28.869	31.526	34.805	37.156
19	6.844	7.633	8.907	10.117	11.651	27.204	30.144	32.852	36.191	38.582
20	7.434	8.260	9.591	10.851	12.443	28.412	31.410	34.170	37.566	39.997
21	8.034	8.897	10.283	11.591	13.240	29.615	32.671	35.479	38.932	41.401
22	8.643	9.542	10.982	12.338	14.041	30.813	33.924	36.781	40.289	42.796
23	9.260	10.196	11.689	13.091	14.848	32.007	35.172	38.076	41.638	44.181
24	9.886	10.856	12.401	13.848	15.659	33.196	36.415	39.364	42.980	45.559
25	10.520	11.524	13.120	14.611	16.473	34.382	37.652	40.646	44.314	46.928
26	11.160	12.198	13.844	15.379	17.292	35.563	38.885	41.923	45.642	48.290
27	11.808	12.879	14.573	16.151	18.114	36.741	40.113	43.195	46.963	49.645
28	12.461	13.565	15.308	16.928	18.939	37.916	41.337	44.461	48.278	50.993
29	13.121	14.256	16.047	17.708	19.768	39.087	42.557	45.722	49.588	52.336
30	13.787	14.953	16.791	18.493	20.599	40.256	43.773	46.979	50.892	53.672
40	20.707	22.164	24.433	26.509	29.051	51.805	55.758	59.342	63.691	66.766
50	27.991	29.707	32.357	34.764	37.689	63.167	67.505	71.420	76.154	79.490
60	35.534	37.485	40.482	43.188	46.459	74.397	79.082	83.298	88.379	91.952
70	43.275	45.442	48.758	51.739	55.329	85.527	90.531	95.023	100.425	104.215
80	51.172	53.540	57.153	60.391	64.278	96.578	101.879	106.629	112.329	116.321
90	59.196	61.754	65.647	69.126	73.291	107.565	113.145	118.136	124.116	128.299
100	67.328	70.065	74.222	77.929	82.358	118.498	124.342	129.561	135.807	140.169



THE *t* DISTRIBUTION TABLE

The entries in the table give the critical values of *t* for the specified number of degrees of freedom and areas in the right tail.



df	Area in the Right Tail under the <i>t</i> Distribution Curve					
	.10	.05	.025	.01	.005	.001
1	3.078	6.314	12.706	31.821	63.657	318.309
2	1.886	2.920	4.303	6.965	9.925	22.327
3	1.638	2.353	3.182	4.541	5.841	10.215
4	1.533	2.132	2.776	3.747	4.604	7.173
5	1.476	2.015	2.571	3.365	4.032	5.893
6	1.440	1.943	2.447	3.143	3.707	5.208
7	1.415	1.895	2.365	2.998	3.499	4.785
8	1.397	1.860	2.306	2.896	3.355	4.501
9	1.383	1.833	2.262	2.821	3.250	4.297
10	1.372	1.812	2.228	2.764	3.169	4.144
11	1.363	1.796	2.201	2.718	3.106	4.025
12	1.356	1.782	2.179	2.681	3.055	3.930
13	1.350	1.771	2.160	2.650	3.012	3.852
14	1.345	1.761	2.145	2.624	2.977	3.787
15	1.341	1.753	2.131	2.602	2.947	3.733
16	1.337	1.746	2.120	2.583	2.921	3.686
17	1.333	1.740	2.110	2.567	2.898	3.646
18	1.330	1.734	2.101	2.552	2.878	3.610
19	1.328	1.729	2.093	2.539	2.861	3.579
20	1.325	1.725	2.086	2.528	2.845	3.552
21	1.323	1.721	2.080	2.518	2.831	3.527
22	1.321	1.717	2.074	2.508	2.819	3.505
23	1.319	1.714	2.069	2.500	2.807	3.485
24	1.318	1.711	2.064	2.492	2.797	3.467
25	1.316	1.708	2.060	2.485	2.787	3.450
26	1.315	1.706	2.056	2.479	2.779	3.435
27	1.314	1.703	2.052	2.473	2.771	3.421
28	1.313	1.701	2.048	2.467	2.763	3.408
29	1.311	1.699	2.045	2.462	2.756	3.396
30	1.310	1.697	2.042	2.457	2.750	3.385
31	1.309	1.696	2.040	2.453	2.744	3.375
32	1.309	1.694	2.037	2.449	2.738	3.365
33	1.308	1.692	2.035	2.445	2.733	3.356
34	1.307	1.691	2.032	2.441	2.728	3.348
35	1.306	1.690	2.030	2.438	2.724	3.340
36	1.306	1.688	2.028	2.434	2.719	3.333
37	1.305	1.687	2.026	2.431	2.715	3.326