

國立中央大學100學年度碩士班考試入學試題卷

所別：工業管理研究所碩士班 甲組(一般生) 科目：統計學 共 5 頁 第 1 頁
 工業管理研究所碩士班 乙組(一般生)

本科考試可使用計算器，廠牌、功能不拘

*請在試卷答案卷(卡)內作答

參考用

- Please provide the definitions for the following terms: (5 pts. each)
 - Probability
 - Random Variable
- Consider two independent uniformly distributed random variable X_1 and X_2 on the interval $[0,1]$. We are interested in the following random variables:
 $D = |X_1 - X_2|$, $R = \text{Max}(X_1, X_2)$, and $L = \text{Min}(X_1, X_2)$.
 - Determine the CDF of random variable D , $F_D(y)$. (10 pts)
 - Determine the pdf of random variable D , $f_D(y)$. (5 pts)
 - Determine the expected value and variance of random variable D . (10 pts)
 - Determine the joint CDF of R and L , $F_{R,L}(r,l)$. (15 pts)
- Let X_1, X_2, \dots, X_n denote a random sample from the distribution with p.d.f.

$$f(x) = \begin{cases} \frac{1}{\theta_2} \exp\left(-\frac{x-\theta_1}{\theta_2}\right), & \theta_1 \leq x < \infty, -\infty < \theta_1 < \infty, 0 < \theta_2 < \infty, \\ = 0 & \text{elsewhere.} \end{cases}$$

Please find the maximum likelihood estimators of θ_1 and θ_2 . (10 pts)

- Assume X follows a normal distribution with mean μ and variance 100. To test $H_0: \mu = 80$ against $H_1: \mu > 80$, let the critical region be defined by $C = \{(x_1, x_2, \dots, x_n): \bar{x} \geq 83\}$, where \bar{x} is the sample mean of a random sample of size $n = 25$ from this distribution. (15 pts)
 - What is the significant level of this test? (3 pts)
 - What is the p -value corresponding to $\bar{x} = 83.41$? (3 pts)
 - Let $K(\mu)$ be the power function for this test. What are the values of $K(80)$, $K(83)$, and $K(86)$? (6 pts)
 - What is the probability of making a type II error if the alternative hypothesis is set to be $H_1: \mu = 86$? (3 pts)
- Let us assume that the life of a tire in miles, say X , is normally distributed with mean μ and standard deviation 5,000. Past experience indicates that $\mu = 30,000$. The manufacturer claims that the tires made by a new process have mean $\mu > 30,000$, and it is very possible that $\mu = 35,000$. Let us check his claim by testing $H_0: \mu = 30,000$ against $H_1: \mu > 30,000$. We shall observe n independent values of X , say x_1, x_2, \dots, x_n , and we shall reject H_0 if and only if $\bar{x} \geq c$. Determine n and c

注意：背面有試題

國立中央大學100學年度碩士班考試入學試題卷

所別：工業管理研究所碩士班 甲組(一般生) 科目：統計學 共 5 頁 第 2 頁
工業管理研究所碩士班 乙組(一般生)

本科考試可使用計算器，廠牌、功能不拘

*請在試卷答案卷(卡)內作答

so that the type I error is 0.01 and the type II error is 0.02 with respect to $H_1: \mu = 35,000$. (10 pts)

6. Suppose a civil engineer wishes to compare the strengths of three different types of beams, one (A) made of steel and two (B and C) made of different and more expensive alloys. A certain deflection (in units of 0.001 inch) was measured for each beam when submitted to a given force; thus a small deflection would indicate a beam of great strength. The order statistics for the three samples of size $n_1 = 8$, $n_2 = 6$, and $n_3 = 6$ are the following:

Types	Deflection (in 0.001 inch)							
A	79	82	83	84	85	86	86	87
B	74	75	76	77	78	82		
C	77	78	79	79	79	82		

- (a) Do the data indicate that there is a difference in results obtained from the three different types of beams? Use $\alpha = 0.05$. (10 pts)
- (b) If it is appropriate to do so, make comparisons between the pairs of means. What conclusions can you draw? <Note: box-and-whisker diagrams might help.> (5 pts)

參考用

注意：背面有試題

國立中央大學100學年度碩士班考試入學試題卷

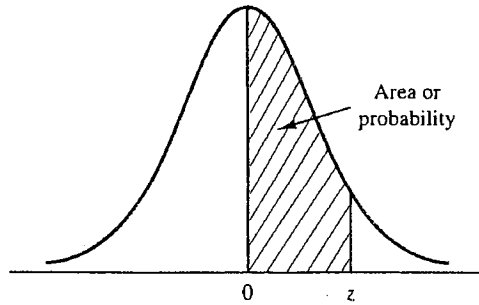
所別：工業管理研究所碩士班 甲組(一般生) 科目：統計學 共 5 頁 第 3 頁
工業管理研究所碩士班 乙組(一般生)

本科考試可使用計算器，廠牌、功能不拘

*請在試卷答案卷(卡)內作答

參考用

STANDARD NORMAL DISTRIBUTION



Entries in the table give the area under the curve between the mean and z standard deviations above the mean. For example, for $z = 1.25$ the area under the curve between the mean and z is .3944.

z	.00	.01	.02	.03	.04	.05	.06	.07	.08	.09
.0	.0000	.0040	.0080	.0120	.0160	.0199	.0239	.0279	.0319	.0359
.1	.0398	.0438	.0478	.0517	.0557	.0596	.0636	.0675	.0714	.0753
.2	.0793	.0832	.0871	.0910	.0948	.0987	.1026	.1064	.1103	.1141
.3	.1179	.1217	.1255	.1293	.1331	.1368	.1406	.1443	.1480	.1517
.4	.1554	.1591	.1628	.1664	.1700	.1736	.1772	.1808	.1844	.1879
.5	.1915	.1950	.1985	.2019	.2054	.2088	.2123	.2157	.2190	.2224
.6	.2257	.2291	.2324	.2357	.2389	.2422	.2454	.2486	.2518	.2549
.7	.2580	.2612	.2642	.2673	.2704	.2734	.2764	.2794	.2823	.2852
.8	.2881	.2910	.2939	.2967	.2995	.3023	.3051	.3078	.3106	.3133
.9	.3159	.3186	.3212	.3238	.3264	.3289	.3315	.3340	.3365	.3389
1.0	.3413	.3438	.3461	.3485	.3508	.3531	.3554	.3577	.3599	.3621
1.1	.3643	.3665	.3686	.3708	.3729	.3749	.3770	.3790	.3810	.3830
1.2	.3849	.3869	.3888	.3907	.3925	.3944	.3962	.3980	.3997	.4015
1.3	.4032	.4049	.4066	.4082	.4099	.4115	.4131	.4147	.4162	.4177
1.4	.4192	.4207	.4222	.4236	.4251	.4265	.4279	.4292	.4306	.4319
1.5	.4332	.4345	.4357	.4370	.4382	.4394	.4406	.4418	.4429	.4441
1.6	.4452	.4463	.4474	.4484	.4495	.4505	.4515	.4525	.4535	.4545
1.7	.4554	.4564	.4573	.4582	.4591	.4599	.4608	.4616	.4625	.4633
1.8	.4641	.4649	.4656	.4664	.4671	.4678	.4686	.4693	.4699	.4706
1.9	.4713	.4719	.4726	.4732	.4738	.4744	.4750	.4756	.4761	.4767
2.0	.4772	.4778	.4783	.4788	.4793	.4798	.4803	.4808	.4812	.4817
2.1	.4821	.4826	.4830	.4834	.4838	.4842	.4846	.4850	.4854	.4857
2.2	.4861	.4864	.4868	.4871	.4875	.4878	.4881	.4884	.4887	.4890
2.3	.4893	.4896	.4898	.4901	.4904	.4906	.4909	.4911	.4913	.4916
2.4	.4918	.4920	.4922	.4925	.4927	.4929	.4931	.4932	.4934	.4936
2.5	.4938	.4940	.4941	.4943	.4945	.4946	.4948	.4949	.4951	.4952
2.6	.4953	.4955	.4956	.4957	.4959	.4960	.4961	.4962	.4963	.4964
2.7	.4965	.4966	.4967	.4968	.4969	.4970	.4971	.4972	.4973	.4974
2.8	.4974	.4975	.4976	.4977	.4977	.4978	.4979	.4979	.4980	.4981
2.9	.4981	.4982	.4982	.4983	.4984	.4984	.4985	.4985	.4986	.4986
3.0	.4986	.4987	.4987	.4988	.4988	.4989	.4989	.4989	.4990	.4990

注意：背面有試題

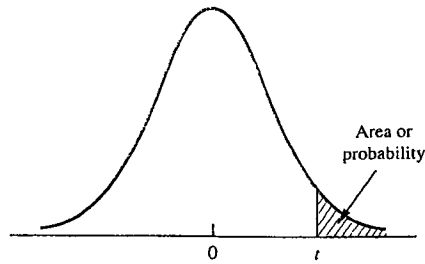
國立中央大學100學年度碩士班考試入學試題卷

所別：工業管理研究所碩士班 甲組(一般生) 科目：統計學 共 5 頁 第 4 頁
工業管理研究所碩士班 乙組(一般生)

本科考試可使用計算器，廠牌、功能不拘

*請在試卷答案卷(卡)內作答

t DISTRIBUTION



Entries in the table give t values for an area or probability in the upper tail of the t distribution. For example, with 10 degrees of freedom and a .05 area in the upper tail, $t_{.05} = 1.812$.

Degrees of Freedom	Area in Upper Tail				
	.10	.05	.025	.01	.005
1	3.078	6.314	12.706	31.821	63.657
2	1.886	2.920	4.303	6.965	9.925
3	1.638	2.353	3.182	4.541	5.841
4	1.533	2.132	2.776	3.747	4.604
5	1.476	2.015	2.571	3.365	4.032
6	1.440	1.943	2.447	3.143	3.707
7	1.415	1.895	2.365	2.998	3.499
8	1.397	1.860	2.306	2.896	3.355
9	1.383	1.833	2.262	2.821	3.250
10	1.372	1.812	2.228	2.764	3.169
11	1.363	1.796	2.201	2.718	3.106
12	1.356	1.782	2.179	2.681	3.055
13	1.350	1.771	2.160	2.650	3.012
14	1.345	1.761	2.145	2.624	2.977
15	1.341	1.753	2.131	2.602	2.947
16	1.337	1.746	2.120	2.583	2.921
17	1.333	1.740	2.110	2.567	2.898
18	1.330	1.734	2.101	2.552	2.878
19	1.328	1.729	2.093	2.539	2.861
20	1.325	1.725	2.086	2.528	2.845
21	1.323	1.721	2.080	2.518	2.831
22	1.321	1.717	2.074	2.508	2.819
23	1.319	1.714	2.069	2.500	2.807
24	1.318	1.711	2.064	2.492	2.797
25	1.316	1.708	2.060	2.485	2.787
26	1.315	1.706	2.056	2.479	2.779
27	1.314	1.703	2.052	2.473	2.771
28	1.313	1.701	2.048	2.467	2.763
29	1.311	1.699	2.045	2.462	2.756
30	1.310	1.697	2.042	2.457	2.750
40	1.303	1.684	2.021	2.423	2.704
60	1.296	1.671	2.000	2.390	2.660
120	1.289	1.658	1.980	2.358	2.617
∞	1.282	1.645	1.960	2.326	2.576

參考用

注意：背面有試題

國立中央大學100學年度碩士班考試入學試題卷

所別：工業管理研究所碩士班 甲組(一般生)
工業管理研究所碩士班 乙組(一般生)

科目：統計學

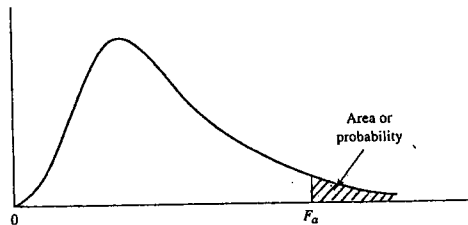
共 5 頁 第 5 頁

本科考試可使用計算器，廠牌、功能不拘

*請在試卷答案卷(卡)內作答

參考用

F TABLE - I



Entries in the table give F_{α} values, where α is the area or probability in the upper tail of the F distribution. For example, with 12 numerator degrees of freedom, 15 denominator degrees of freedom, and a .05 area in the upper tail, $F_{.05} = 2.48$.

Table of $F_{.05}$ Values

Denominator Degrees of Freedom	Numerator Degrees of Freedom																		
	1	2	3	4	5	6	7	8	9	10	12	15	20	24	30	40	60	120	∞
1	161.4	199.5	215.7	224.6	230.2	234.0	236.8	238.9	240.5	241.9	243.9	245.9	248.0	249.1	250.1	251.1	252.2	253.3	254.3
2	18.51	19.00	19.16	19.25	19.30	19.33	19.35	19.37	19.38	19.40	19.41	19.43	19.45	19.45	19.46	19.47	19.48	19.49	19.50
3	10.13	9.55	9.28	9.12	9.01	8.94	8.89	8.85	8.81	8.79	8.74	8.70	8.66	8.64	8.62	8.59	8.57	8.55	8.53
4	7.71	6.94	6.59	6.39	6.26	6.16	6.09	6.04	6.00	5.96	5.91	5.86	5.80	5.77	5.75	5.72	5.69	5.66	5.63
5	6.61	5.79	5.41	5.19	5.05	4.95	4.88	4.82	4.77	4.74	4.68	4.62	4.56	4.53	4.50	4.46	4.43	4.40	4.36
6	5.99	5.14	4.76	4.53	4.39	4.28	4.21	4.15	4.10	4.06	4.00	3.94	3.87	3.84	3.81	3.77	3.74	3.70	3.67
7	5.59	4.74	4.35	4.12	3.97	3.87	3.79	3.73	3.68	3.64	3.57	3.51	3.44	3.41	3.38	3.34	3.30	3.27	3.23
8	5.32	4.46	4.07	3.84	3.69	3.58	3.50	3.44	3.39	3.35	3.28	3.22	3.15	3.12	3.08	3.04	3.01	2.97	2.93
9	5.12	4.26	3.86	3.63	3.48	3.37	3.29	3.23	3.18	3.14	3.07	3.01	2.94	2.90	2.86	2.83	2.79	2.75	2.71
10	4.96	4.10	3.71	3.48	3.33	3.22	3.14	3.07	3.02	2.98	2.91	2.85	2.77	2.74	2.70	2.66	2.62	2.58	2.54
11	4.84	3.98	3.59	3.36	3.20	3.09	3.01	2.95	2.90	2.85	2.79	2.72	2.65	2.61	2.57	2.53	2.49	2.45	2.40
12	4.75	3.89	3.49	3.26	3.10	3.00	2.91	2.85	2.80	2.75	2.69	2.62	2.54	2.51	2.47	2.43	2.38	2.34	2.30
13	4.67	3.81	3.41	3.18	3.03	2.92	2.83	2.77	2.71	2.67	2.60	2.53	2.46	2.42	2.38	2.34	2.30	2.25	2.21
14	4.60	3.74	3.34	3.11	2.96	2.85	2.76	2.70	2.65	2.60	2.53	2.46	2.39	2.35	2.31	2.27	2.22	2.18	2.13
15	4.54	3.68	3.29	3.06	2.90	2.79	2.71	2.64	2.59	2.54	2.48	2.40	2.33	2.29	2.25	2.20	2.16	2.11	2.07
16	4.49	3.63	3.24	3.01	2.85	2.74	2.66	2.59	2.54	2.49	2.42	2.35	2.28	2.24	2.19	2.15	2.11	2.06	2.01
17	4.45	3.59	3.20	2.96	2.81	2.70	2.61	2.55	2.49	2.45	2.38	2.31	2.23	2.19	2.15	2.10	2.06	2.01	1.96
18	4.41	3.55	3.16	2.93	2.77	2.66	2.58	2.51	2.46	2.41	2.34	2.27	2.19	2.15	2.11	2.06	2.02	1.97	1.92
19	4.38	3.52	3.13	2.90	2.74	2.63	2.54	2.48	2.42	2.38	2.31	2.23	2.16	2.11	2.07	2.03	1.98	1.93	1.88
20	4.35	3.49	3.10	2.87	2.71	2.60	2.51	2.45	2.39	2.35	2.28	2.20	2.12	2.08	2.04	1.99	1.95	1.90	1.84
21	4.32	3.47	3.07	2.84	2.68	2.57	2.49	2.42	2.37	2.32	2.25	2.18	2.10	2.05	2.01	1.96	1.92	1.87	1.81
22	4.30	3.44	3.05	2.82	2.66	2.55	2.46	2.40	2.34	2.30	2.23	2.15	2.07	2.03	1.98	1.94	1.89	1.84	1.78
23	4.28	3.42	3.03	2.80	2.64	2.53	2.44	2.37	2.32	2.27	2.20	2.13	2.05	2.01	1.96	1.91	1.86	1.81	1.76
24	4.26	3.40	3.01	2.78	2.62	2.51	2.42	2.36	2.30	2.25	2.18	2.11	2.03	1.98	1.94	1.89	1.84	1.79	1.73
25	4.24	3.39	2.99	2.76	2.60	2.49	2.40	2.34	2.28	2.24	2.16	2.09	2.01	1.96	1.92	1.87	1.82	1.77	1.71
26	4.23	3.37	2.98	2.74	2.59	2.47	2.39	2.32	2.27	2.22	2.15	2.07	1.99	1.95	1.90	1.85	1.80	1.75	1.69
27	4.21	3.35	2.96	2.73	2.57	2.46	2.37	2.31	2.25	2.20	2.13	2.06	1.97	1.93	1.88	1.84	1.79	1.73	1.67
28	4.20	3.34	2.95	2.71	2.56	2.45	2.36	2.29	2.24	2.19	2.12	2.04	1.96	1.91	1.87	1.82	1.77	1.71	1.65
29	4.18	3.33	2.93	2.70	2.55	2.43	2.35	2.28	2.22	2.18	2.10	2.03	1.94	1.90	1.85	1.81	1.75	1.70	1.64
30	4.17	3.32	2.92	2.69	2.53	2.42	2.33	2.27	2.21	2.16	2.09	2.01	1.93	1.89	1.84	1.79	1.74	1.68	1.62
40	4.08	3.23	2.84	2.61	2.45	2.34	2.25	2.18	2.12	2.08	2.00	1.92	1.84	1.79	1.74	1.69	1.64	1.58	1.51
60	4.00	3.15	2.76	2.53	2.37	2.25	2.17	2.10	2.04	1.99	1.92	1.84	1.75	1.70	1.65	1.59	1.53	1.47	1.39
120	3.92	3.07	2.68	2.45	2.29	2.17	2.09	2.02	1.96	1.91	1.83	1.75	1.66	1.61	1.55	1.50	1.43	1.35	1.25
∞	3.84	3.00	2.60	2.37	2.21	2.10	2.01	1.94	1.88	1.83	1.75	1.67	1.57	1.52	1.46	1.39	1.32	1.22	1.00