

國立中央大學102學年度碩士班考試入學試題卷

所別：經濟學系碩士班 不分組(一般生) 科目：統計學 共 4 頁 第 1 頁

本科考試禁用計算器

*請在試卷答案卷(卡)內作答

參考用

1. Aging is thought to be a problem in government offices. The following table shows the age distribution of 50 employees in Ministry of Finance:

Mid-point	frequency
25	2
30	7
35	8
40	10
45	8
50	7
55	6
60	2

- a. What are the mean and standard deviation of employees' age. (8 分)
 b. Please calculate is the inter-quartile range (IQR)(6 分)
2. Answer the following questions: (每小題 6 分，共 24 分)
- a. Let A and B be events in a probability space. $P(A) = 0.6$ and $P(B) = 0.2$. Furthermore, $B \subset A$. Please find the probability, $P(A^c \cup B^c)$.
- b. Let x_1 and x_2 be independent random variables, both normally distributed. The mean of x_1 and x_2 are 2 and 5, respectively, whereas the variances x_1 and x_2 are 5 and 9, respectively. We define $y = 3x_1 - 2x_2 + 1$. What is the probability of $P(y \geq 6)$
- c. Let x be a continuous random variable with a standard normal distribution. We consider the transformation $y = |x|$. The probability density function (PDF) of y is?
- d. In a binomial distribution $n=800$ and $p=0.003$. Find the probability of at most 2 successes.

3. Consider the following hypothesis test ($\alpha=0.05$): (12 分)

$$H_0: \mu \geq 80; \quad H_a: \mu < 80$$

A sample of 100 is used ($\bar{x}=77$) and the population standard deviation is 12. To implement the hypothesis testing, there are three available methods, mainly critical value, z-value, and p-value approaches. Please draw a figure to display and interpret that the testing results by using these three approaches are the same.

4. The regression dataset contains 200 individuals, 100 male and 100 female. Answer the following questions by the information provided below.

The model:

$$Y_i = \beta_1 + \beta_2 X_{1i} + \beta_3 X_{2i} + \varepsilon_i \quad (1)$$

The results with standard errors in the parentheses:

$$\hat{Y}_i = 2.32 + 0.64X_{1i} + 0.89X_{2i}, \quad R^2 = 0.50. \quad (2)$$

(1.16) (0.32) (0.50)

注意：背面有試題

國立中央大學102學年度碩士班考試入學試題卷

所別：經濟學系碩士班 不分組(一般生) 科目：統計學 共 4 頁 第 2 頁

本科考試禁用計算器

*請在試卷答案卷(卡)內作答

參考用

- a. (10分) Is the following statement true, false or uncertain? Your score will solely depend on your explanation.

“If $Cov(X_{i1}, \varepsilon_i) > 0$, then $\beta_2 < 0.64$.”

- b. (10分) Is the following statement true, false or uncertain? Your score will solely depend on your explanation.

“The magnitude of the covariance of X_1 and X_2 is nothing to do with the coefficient estimates in equation (2); yet, it is correlated with the statistical significance.”

- c. (10分) Answer the following questions *by utilizing the estimation results in equation (2)*.

Conduct a joint hypothesis test that both X_1 and X_2 are important explanatory variables.

Conduct a hypothesis test and investigate if the coefficient of X_1 is equal to 1.

- d. (10分) A dummy variable S , 1 if male and 0 otherwise, and its interactive effect with X_1 are simultaneously included in the model. Denote the corresponding coefficients for the two variables as β_4 and β_5 , respectively. The estimated β_4 and β_5 are 0.02 and -0.10 with standard error 0.01 and 0.05, respectively.

Perform the hypothesis test that, other things being equal, there is no difference in Y between the two sexes.

Find the marginal effect of X_1 in the modified model and explain your finding.

- e. (10分) To investigate the distribution of the dependent variable Y , the data is categorized into 5 groups below:


Y	Under 40	40~50	50~60	60~70	70 or more	Total
frequency	34	40	45	50	31	200

Do the observed frequencies coincide with the expected frequencies based on the normal probability distribution? (The sample mean and the standard deviation of Y are 54 and 14, respectively.)

注意：背面有試題

APPENDIX G

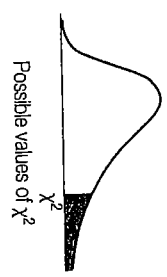
Critical Values of the F Distribution
at a 5 Percent Level of Significance



Degrees of Freedom for the Denominator	Degrees of Freedom for the Numerator															
	1	2	3	4	5	6	7	8	9	10	12	15	20	24	30	40
1	161	200	216	225	230	234	237	239	241	242	244	245	248	249	250	251
2	18.5	19.0	19.2	19.2	19.3	19.3	19.4	19.4	19.4	19.4	19.4	19.4	19.4	19.5	19.5	19.5
3	10.1	9.55	9.28	9.12	9.01	8.94	8.89	8.85	8.81	8.79	8.74	8.70	8.66	8.64	8.62	8.59
4	7.71	6.94	6.59	6.39	6.26	6.16	6.09	6.04	6.00	5.96	5.91	5.86	5.80	5.77	5.75	5.72
5	6.61	5.79	5.41	5.19	5.05	4.95	4.88	4.82	4.77	4.74	4.68	4.62	4.56	4.53	4.50	4.46
6	5.99	5.14	4.76	4.53	4.39	4.28	4.21	4.15	4.10	4.06	4.00	3.94	3.87	3.84	3.81	3.77
7	5.59	4.74	4.35	4.12	3.97	3.87	3.79	3.73	3.68	3.64	3.57	3.51	3.44	3.41	3.38	3.34
8	5.32	4.46	4.07	3.84	3.69	3.58	3.50	3.44	3.39	3.35	3.28	3.22	3.15	3.12	3.08	3.04
9	5.12	4.26	3.86	3.63	3.48	3.37	3.29	3.23	3.18	3.14	3.07	3.01	2.94	2.90	2.86	2.83
10	4.96	4.10	3.71	3.48	3.33	3.22	3.14	3.07	3.02	2.98	2.91	2.85	2.77	2.74	2.70	2.66
11	4.84	3.98	3.59	3.36	3.20	3.09	3.01	2.95	2.90	2.85	2.79	2.72	2.65	2.61	2.57	2.53
12	4.75	3.89	3.49	3.26	3.11	3.00	2.91	2.85	2.80	2.75	2.69	2.62	2.54	2.51	2.47	2.43
13	4.67	3.81	3.41	3.18	3.03	2.92	2.83	2.77	2.71	2.67	2.60	2.53	2.46	2.42	2.38	2.34
14	4.60	3.74	3.34	3.11	2.96	2.85	2.76	2.70	2.65	2.60	2.53	2.46	2.39	2.35	2.31	2.27
15	4.54	3.68	3.29	3.06	2.90	2.79	2.71	2.64	2.59	2.54	2.48	2.40	2.33	2.29	2.25	2.20
16	4.49	3.63	3.24	3.01	2.85	2.74	2.66	2.59	2.54	2.49	2.42	2.35	2.28	2.24	2.19	2.15
17	4.45	3.59	3.20	2.96	2.81	2.70	2.61	2.55	2.49	2.45	2.38	2.31	2.23	2.19	2.15	2.10
18	4.41	3.55	3.16	2.93	2.77	2.66	2.58	2.51	2.46	2.41	2.34	2.27	2.19	2.15	2.11	2.06
19	4.38	3.52	3.13	2.90	2.74	2.63	2.54	2.48	2.42	2.38	2.31	2.23	2.16	2.11	2.07	2.03
20	4.35	3.49	3.10	2.87	2.71	2.60	2.51	2.45	2.39	2.35	2.28	2.20	2.12	2.08	2.04	1.99
21	4.32	3.47	3.07	2.84	2.68	2.57	2.49	2.42	2.37	2.32	2.25	2.18	2.10	2.05	2.01	1.96
22	4.30	3.44	3.05	2.82	2.66	2.55	2.46	2.40	2.34	2.30	2.23	2.15	2.07	2.03	1.98	1.94
23	4.28	3.42	3.03	2.80	2.64	2.53	2.44	2.37	2.32	2.27	2.20	2.13	2.05	2.01	1.96	1.91
24	4.26	3.40	3.01	2.78	2.62	2.51	2.42	2.36	2.30	2.25	2.18	2.11	2.03	1.98	1.94	1.89
25	4.24	3.39	2.99	2.76	2.60	2.49	2.40	2.34	2.28	2.24	2.16	2.09	2.01	1.96	1.92	1.87
30	4.17	3.32	2.92	2.69	2.53	2.42	2.33	2.27	2.21	2.16	2.09	2.01	1.93	1.89	1.84	1.79
40	4.08	3.23	2.84	2.61	2.45	2.34	2.25	2.18	2.12	2.08	2.00	1.92	1.84	1.79	1.74	1.69
60	4.00	3.15	2.76	2.53	2.37	2.25	2.17	2.10	2.04	1.99	1.92	1.84	1.75	1.70	1.65	1.59
80	3.92	3.07	2.68	2.45	2.29	2.18	2.09	2.02	1.96	1.91	1.83	1.75	1.66	1.61	1.55	1.50
∞	3.84	3.00	2.60	2.37	2.21	2.10	2.01	1.94	1.88	1.83	1.75	1.67	1.57	1.52	1.46	1.39

參考用

APPENDIX I
Critical Values of Chi-Square
This table contains the values of χ^2 that correspond to a specific right-tail area and specific number of degrees of freedom.



Degrees of Freedom, df	Right-Tail Area			
	0.10	0.05	0.02	0.01
1	2.706	3.841	5.412	6.635
2	4.605	5.991	7.824	9.210
3	6.251	7.815	9.837	11.345
4	7.779	9.488	11.668	13.277
5	9.236	11.070	13.388	15.086
6	10.645	12.592	15.033	16.812
7	12.017	14.067	16.622	18.475
8	13.362	15.507	18.168	20.090
9	14.684	16.919	19.679	21.666
10	15.987	18.307	21.161	23.209
11	17.275	19.675	22.618	24.725
12	18.549	21.026	24.054	26.217
13	19.812	22.362	25.472	27.688
14	21.064	23.685	26.873	29.141
15	22.307	24.996	28.259	30.578
16	23.542	26.296	29.633	32.000
17	24.769	27.587	30.995	33.409
18	25.989	28.869	32.346	34.805
19	27.204	30.144	33.687	36.191
20	28.412	31.410	35.020	37.566
21	29.615	32.671	36.343	38.932
22	30.813	33.924	37.659	40.289
23	32.007	35.172	38.968	41.638
24	33.196	36.415	40.270	42.980
25	34.382	37.652	41.566	44.314
26	35.563	38.885	42.856	45.642
27	36.741	40.113	44.140	46.963
28	37.916	41.337	45.419	48.278
29	39.087	42.557	46.693	49.588
30	40.256	43.773	47.962	50.892

注意：背面有試題

本科考試禁用計算器

*請在試卷答案卷(卡)內作答

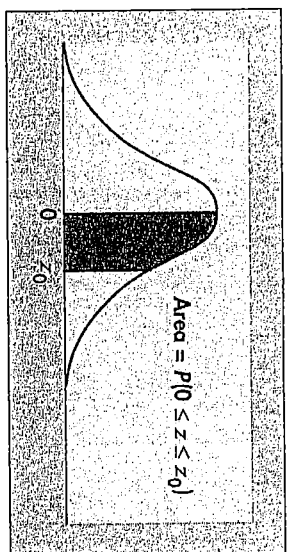
表7 卜瓦松機率 Poisson

x	0.1	0.2	0.3	0.4	0.5	0.6	0.7	0.8	0.9	1.0
0	0.9048	0.8187	0.7408	0.6703	0.6065	0.5488	0.4966	0.4493	0.4066	0.3679
1	0.0905	0.1637	0.2222	0.2681	0.3033	0.3293	0.3476	0.3595	0.3659	0.3679
2	0.0045	0.0164	0.0333	0.0536	0.0758	0.0988	0.1217	0.1438	0.1647	0.1839
3	0.0002	0.0011	0.0033	0.0072	0.0126	0.0198	0.0284	0.0383	0.0494	0.0613
4	0.0000	0.0001	0.0002	0.0007	0.0016	0.0030	0.0050	0.0077	0.0111	0.0153
5	0.0000	0.0000	0.0000	0.0001	0.0002	0.0004	0.0007	0.0012	0.0020	0.0031
6	0.0000	0.0000	0.0000	0.0000	0.0000	0.0000	0.0001	0.0002	0.0003	0.0005
7	0.0000	0.0000	0.0000	0.0000	0.0000	0.0000	0.0000	0.0000	0.0000	0.0001

x	1.1	1.2	1.3	1.4	1.5	1.6	1.7	1.8	1.9	2.0
0	0.3329	0.3012	0.2725	0.2466	0.2231	0.2019	0.1827	0.1653	0.1496	0.1353
1	0.3662	0.3614	0.3543	0.3452	0.3347	0.3230	0.3106	0.2975	0.2842	0.2707
2	0.2014	0.2169	0.2303	0.2417	0.2510	0.2584	0.2640	0.2678	0.2700	0.2707
3	0.0738	0.0867	0.0998	0.1128	0.1255	0.1378	0.1496	0.1607	0.1710	0.1804
4	0.0203	0.0260	0.0324	0.0395	0.0471	0.0551	0.0636	0.0723	0.0812	0.0902
5	0.0045	0.0062	0.0084	0.0111	0.0141	0.0176	0.0216	0.0260	0.0309	0.0361
6	0.0008	0.0012	0.0018	0.0026	0.0035	0.0047	0.0061	0.0078	0.0098	0.0120
7	0.0001	0.0002	0.0003	0.0005	0.0008	0.0011	0.0015	0.0020	0.0027	0.0034
8	0.0000	0.0000	0.0001	0.0001	0.0001	0.0002	0.0003	0.0005	0.0006	0.0009
9	0.0000	0.0000	0.0000	0.0000	0.0000	0.0000	0.0001	0.0001	0.0001	0.0002

x	2.1	2.2	2.3	2.4	2.5	2.6	2.7	2.8	2.9	3.0
0	0.1225	0.1108	0.1003	0.0907	0.0821	0.0743	0.0672	0.0608	0.0550	0.0498
1	0.2572	0.2438	0.2306	0.2177	0.2052	0.1931	0.1815	0.1703	0.1596	0.1494
2	0.2700	0.2681	0.2652	0.2613	0.2565	0.2510	0.2450	0.2384	0.2314	0.2240
3	0.1890	0.1966	0.2033	0.2090	0.2138	0.2176	0.2205	0.2225	0.2237	0.2240
4	0.0992	0.1082	0.1169	0.1254	0.1336	0.1414	0.1488	0.1557	0.1622	0.1680
5	0.0417	0.0476	0.0538	0.0602	0.0668	0.0735	0.0804	0.0872	0.0940	0.1008
6	0.0146	0.0174	0.0206	0.0241	0.0278	0.0319	0.0362	0.0407	0.0455	0.0504
7	0.0044	0.0055	0.0068	0.0083	0.0099	0.0118	0.0139	0.0163	0.0188	0.0216
8	0.0011	0.0015	0.0019	0.0025	0.0031	0.0038	0.0047	0.0057	0.0068	0.0081
9	0.0003	0.0004	0.0005	0.0007	0.0009	0.0011	0.0014	0.0018	0.0022	0.0027
10	0.0001	0.0001	0.0001	0.0001	0.0002	0.0003	0.0004	0.0005	0.0006	0.0008
11	0.0000	0.0000	0.0000	0.0000	0.0000	0.0001	0.0001	0.0001	0.0002	0.0002
12	0.0000	0.0000	0.0000	0.0000	0.0000	0.0000	0.0000	0.0000	0.0000	0.0001

Table of normal curve areas



z ₀	.00	.01	.02	.03	.04	.05	.06	.07	.08	.09
0.0	.0000	.0040	.0080	.0120	.0160	.0199	.0239	.0279	.0319	.0359
0.1	.0398	.0438	.0478	.0517	.0557	.0596	.0636	.0675	.0714	.0753
0.2	.0793	.0832	.0871	.0910	.0948	.0987	.1026	.1064	.1103	.1141
0.3	.1179	.1217	.1255	.1293	.1331	.1368	.1406	.1443	.1480	.1517
0.4	.1554	.1591	.1628	.1664	.1700	.1736	.1772	.1808	.1844	.1879
0.5	.1915	.1950	.1985	.2019	.2054	.2088	.2123	.2157	.2190	.2224
0.6	.2257	.2291	.2324	.2357	.2389	.2422	.2454	.2486	.2517	.2549
0.7	.2580	.2611	.2642	.2673	.2704	.2734	.2764	.2794	.2823	.2852
0.8	.2881	.2910	.2939	.2967	.2995	.3023	.3051	.3078	.3106	.3133
0.9	.3159	.3186	.3212	.3238	.3264	.3289	.3315	.3340	.3365	.3389
1.0	.3413	.3438	.3461	.3485	.3508	.3531	.3554	.3577	.3599	.3621
1.1	.3643	.3665	.3686	.3708	.3729	.3749	.3770	.3790	.3810	.3830
1.2	.3849	.3869	.3888	.3907	.3925	.3944	.3962	.3980	.3997	.4015
1.3	.4032	.4049	.4066	.4082	.4099	.4115	.4131	.4147	.4162	.4177
1.4	.4192	.4207	.4222	.4236	.4251	.4265	.4279	.4292	.4306	.4319
1.5	.4332	.4345	.4357	.4370	.4382	.4394	.4406	.4418	.4429	.4441
1.6	.4452	.4463	.4474	.4484	.4495	.4505	.4515	.4525	.4535	.4545
1.7	.4554	.4564	.4573	.4582	.4591	.4599	.4608	.4616	.4625	.4633
1.8	.4641	.4649	.4656	.4664	.4671	.4678	.4686	.4693	.4699	.4706
1.9	.4713	.4719	.4726	.4732	.4738	.4744	.4750	.4756	.4761	.4767
2.0	.4772	.4778	.4783	.4788	.4793	.4798	.4803	.4808	.4812	.4817
2.1	.4821	.4826	.4830	.4834	.4838	.4842	.4846	.4850	.4854	.4857
2.2	.4861	.4864	.4868	.4871	.4875	.4878	.4881	.4884	.4887	.4890
2.3	.4893	.4896	.4898	.4901	.4904	.4906	.4909	.4911	.4913	.4916
2.4	.4918	.4920	.4922	.4925	.4927	.4929	.4931	.4932	.4934	.4936
2.5	.4938	.4940	.4941	.4943	.4945	.4946	.4948	.4949	.4951	.4952
2.6	.4953	.4955	.4956	.4957	.4959	.4960	.4961	.4962	.4963	.4964
2.7	.4965	.4966	.4967	.4968	.4969	.4970	.4971	.4972	.4973	.4974
2.8	.4974	.4975	.4976	.4977	.4977	.4978	.4979	.4979	.4980	.4981
2.9	.4981	.4982	.4982	.4983	.4984	.4984	.4985	.4985	.4986	.4986
3.0	.4987	.4987	.4987	.4988	.4988	.4989	.4989	.4989	.4990	.4990

注意：背面有試題

參考用